

Digital Logic Design Lab #4

Objectives

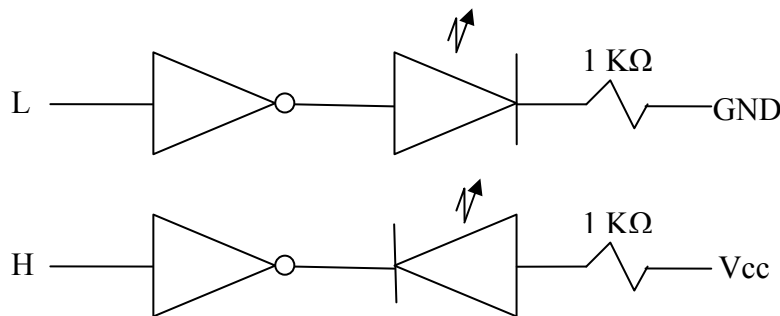
- 1) Application of K-map and related design techniques
- 2) Use of input and output devices in a digital circuit
- 3) Understanding of basic arithmetic unit design and implementation
- 4) Proficiency in requirement analysis, logic design, implementation and testing processes.

Materials

- 1) Textbook: Digital Logic Design by Khormaei.
- 2) Course Website: www.EngrCS.com
- 3) Instruments: Power Supply, Function Generator and Oscilloscope
- 4) Supplies:
 - a) Proto Board (1 unit)
 - b) Jumper Wires (as needed)
 - c) 7-Segment Display (1 unit)
 - d) 1 k Ω resistor (4 units)
 - e) 74LSxx as required by the design (consider using BCD to 7-segment driver, 74LS47)

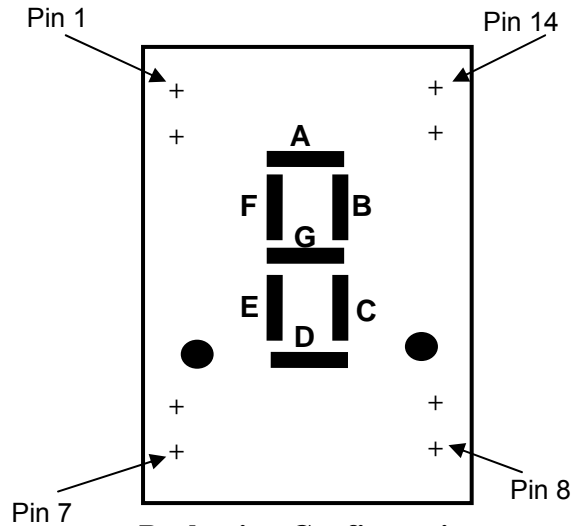
Reminder

LEDs are always used in series with resistors in order to limit the current through the LED to 3-8 mA. As shown in the following two examples:



Experiment #1. 7-Segment Design

7-Segment displays as the name implies have seven segments that may be turned on individually to form an approximation to a given letter or number. Below are the specifications for Common Anode 7-Segment model # Lumex LDS-A304RI:



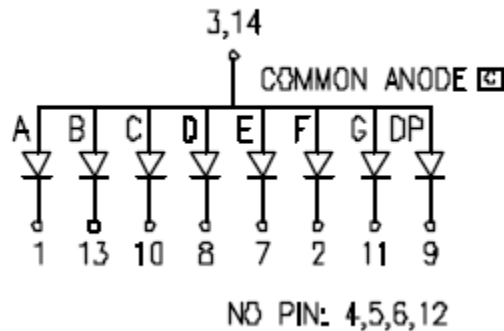
Packaging Configuration

Limit of Safe Operation

Peak I_f	$< 150 \text{ mA}$
Steady I_f	$< 30 \text{ mA}$
Power	$< 105 \text{ mW}$

Typical

5 mA at 5V



Functional Diagram

It is important that you add a 1 K Ω resistor between Pins 3,14 and Vcc to limit the maximum current through the diodes. For this experiment:

- 1) Calculate the maximum combined forward current through all 8 diodes.

Notes:

- a) Anode pins (3 & 14) are connected to the Vcc through a 1 K resistor.
- b) Assume LED have 0 ohm resistor and remember $V=I \cdot R$ where V is voltage in Volts, I is current in Amps and R is resistance in Ohms.

- 2) Design and Draw the schematic for a circuit that turns on A, B, C, E, F, G segment.
- 3) Implement your design and document your observations.

Experiment 2. 2-bit Adder

Design a 2-bit binary adder with carry. Your circuit should allow for two 2-bit binary input (a_1a_0 & b_1b_0) through switches and display the results of the addition in decimal format using the 7-segment display.

Your deliverables include:

- a) Clearly identified independent variables (input) and dependent variables (output) for the 2-bit binary adder system.
- b) Truth Table for the system based on input/output defined in part a
- c) Write the minimize output functions in either POS or SOP using K-map. Clearly state the literal count and corresponding number of gates to implement each of the minimized output functions.
- d) Using the results from part c or your research into possible designs, draw a schematic to implement 2-bit adder with carry.

Hint: Consider using Full-adder and half-adder design.

- e) Implement, test and demonstrated your design from section d.

Report Requirements

All reports must be computer printed (Formulas and Diagrams may be hand drawn) and at minimum include:

For each Experiment

- a) Clear problem statement; specify items given and to be found.
- b) Identify the theory or process used.
- c) Documents resulting system diagram, schematics, tables, timing diagram, schematic and other relevant results.

For the report as a whole

- a) Cover sheet with your name, course, lab, date of completion and team members' names.
- b) Lessons Learned from the experiments.
- c) A new experiment and expected results which provide additional opportunity to practice the concepts in this lab.